


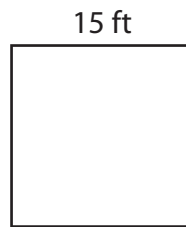
Perimeter of a Square

Find the perimeter of each square.

1)



2)



3)



Per

Preview

4)

Become a member to unlock
unrestricted access to both printable
and online worksheets.


22 yd

Per


www.tutoringhour.com



7)



8)



9)



Perimeter = _____

Perimeter = _____

Perimeter = _____