


# Finding Side Length from Perimeter

Find the side length of each square using the given perimeter.

1) Perimeter = 32 in

2) Perimeter = 64 yd

3) Perimeter = 80 ft



## Preview

Become a member to unlock  
unrestricted access to both printable  
and online worksheets.






[www.tutoringhour.com](http://www.tutoringhour.com)

7) Perimeter = 24 yd

8) Perimeter = 48 ft

9) Perimeter = 72 in



Side length = \_\_\_\_\_

Side length = \_\_\_\_\_

Side length = \_\_\_\_\_