




Reading and Interpreting Pictographs

- 1) Riley, Kim, and Will carved jack-o'-lanterns for Halloween. Shown in the pictograph is the number of pumpkins carved by each of them. Read the pictograph and answer the questions.

i) Who carved the most pumpkins?

Jack-O'-Lanterns	
Children	Number of Pumpkins
Riley	
Kim	
Will	

ii) How many pumpkins did Riley carve?

Preview




Become a member to unlock
unrestricted access to both printable
and online worksheets.

www.tutoringhour.com


- 2) A
ho
an

- 3) Little Tim was strolling through a park on a Saturday evening. He kept count of the different equipment he saw in the park. Observe the data, and answer the questions.

i) How many seesaws did Tim count?

Park Equipment Tim Saw	
Equipments	Number of Park Equipment
Swings	
Monkey Bars	
Seesaws	

ii) How many more swings were there than monkey bars?

 Key
= 1 equipment