

Decomposing Numbers as Tens and Ones

A) Decompose each number, and write how many tens and ones in each.

1) $19 = \underline{\quad\quad}$ ten and $\underline{\quad\quad}$ ones

2) $14 = \underline{\quad\quad}$ ten and $\underline{\quad\quad}$ ones

B) es.



Preview

Become a member to unlock
unrestricted access to both printable
and online worksheets.




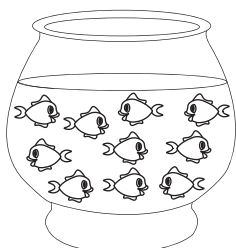
www.tutoringhour.com

C)



Total	Ten	Ones

2)



Total	Ten	Ones