

# Decomposing Numbers as Tens and Ones

A) Decompose each number, and write how many tens and ones in each.

1)  $13 =$  \_\_\_\_\_ ten and \_\_\_\_\_ ones

2)  $17 =$  \_\_\_\_\_ ten and \_\_\_\_\_ ones

B) es.

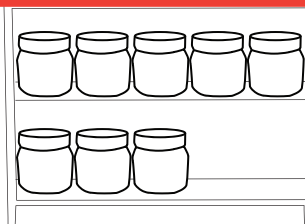
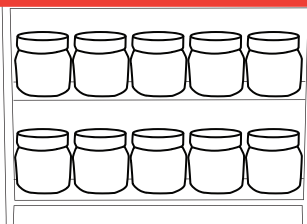
## Preview

Become a member to unlock  
unrestricted access to both printable  
and online worksheets.





www.tutoringhour.com

C)



| Total | Ten | Ones |
|-------|-----|------|
|       |     |      |

2)



| Total | Ten | Ones |
|-------|-----|------|
|       |     |      |