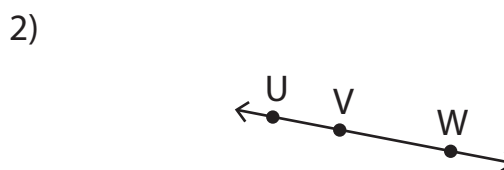
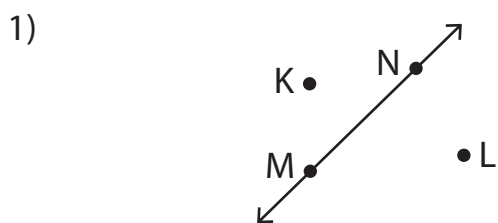


Collinear and Non-Collinear Points

A) Write whether the given points are collinear or not.



The points K, L, and M are _____ . The points U, V, and W are _____ .

3)

Preview

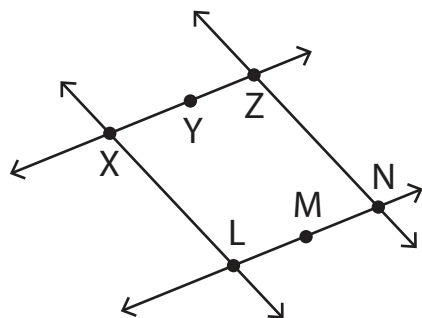
Become a member to unlock
unrestricted access to both printable
and online worksheets.



www.tutoringhour.com

Collinear: _____ Non-Collinear: _____

C) Look at the figure and state whether the given statements are true or false.



1) The points L, M, and N are non-collinear. True False

2) The points X, Y, and Z are collinear. True False