

Points, Lines, and Planes

Answer Key

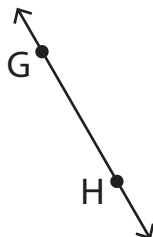
State if each figure is a point, plane, or line and name it.

1)



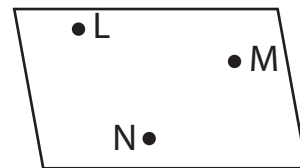
Point R

2)



\overleftrightarrow{GH} or \overleftrightarrow{HG}

3)



Plane LMN

4)



\overleftrightarrow{VW} or \overleftrightarrow{WV}

5)



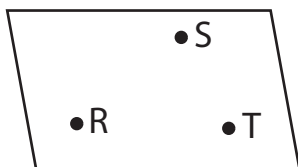
Plane χ

6)



Points X, Y, and Z

7)



Plane RST

8)



Points E and F

9)



\overleftrightarrow{PQ} or \overleftrightarrow{QP}