

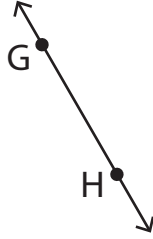
Points, Lines, and Planes

State if each figure is a point, plane, or line and name it.

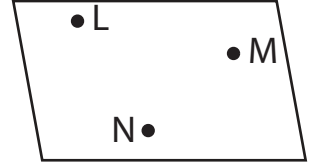
1)



2)



3)



4)



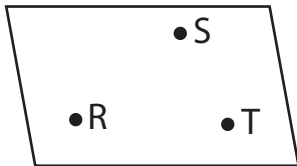
5)



6)



7)



8)



9)

