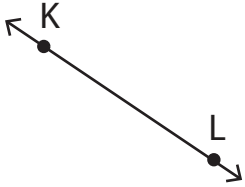


Points, Lines, and Planes

State if each figure is a point, plane, or line and name it.

1)



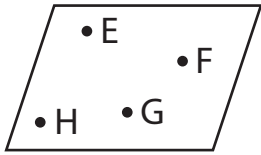
2)



3)



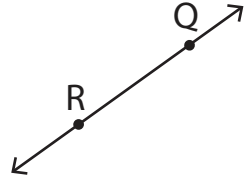
4)



5)



6)



7)



8)



9)