

# Points, Lines, and Planes

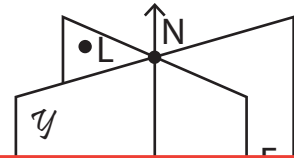
Observe the figures and answer.

1) a) Name the planes.

\_\_\_\_\_

b) Write all the points on the plane  $\mathcal{Z}$ .

\_\_\_\_\_



c)


d)

e)

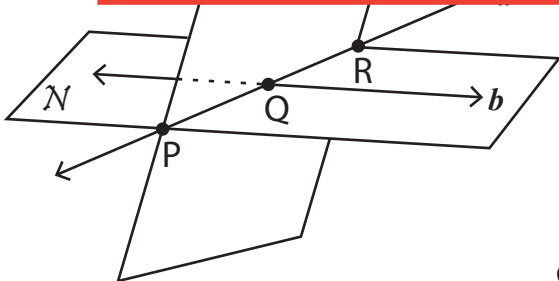
2)

# Preview

Become a member to unlock  
unrestricted access to both printable  
and online worksheets.



[www.tutoringhour.com](http://www.tutoringhour.com)



c) Name the planes.

\_\_\_\_\_

d) Write all the points in the figure.

\_\_\_\_\_

e) Which line do the planes  $\mathcal{M}$  and  $\mathcal{N}$  intersect at?

\_\_\_\_\_