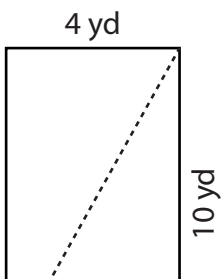


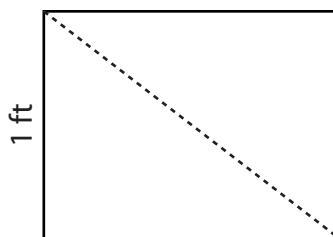
Rectangles | Finding Length of the Diagonal

Find the length of the diagonal of each rectangle. Round your answer to the nearest tenth.

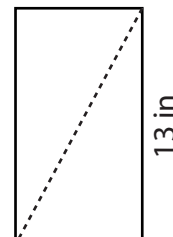
1)



2)



3)



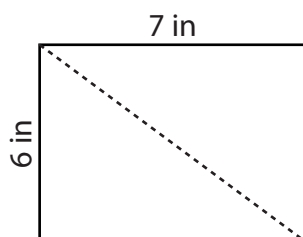
Preview

Become a member to unlock
unrestricted access to both printable
and online worksheets.



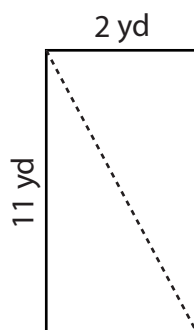
www.tutoringhour.com

7)



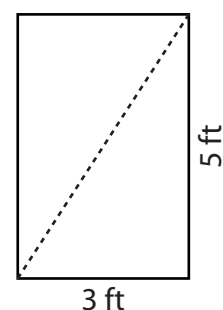
Diagonal = _____

8)



Diagonal = _____

9)



Diagonal = _____