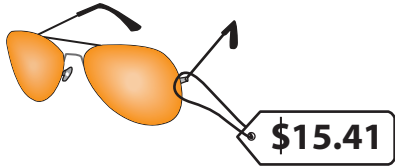


Rounding Money

Answer Key


A) Round the price of each item to the nearest dollar.

1)



\$15

2)



\$23


3)



\$3

B) Round the price of each item to the nearest ten dollars.

1)



\$10

2)



\$830

3)



\$640

C) Round each amount to the nearest dollar.

1) \$7.55

\$8

2) \$11.32

\$11

3) \$45.72

\$46

4) \$4.07

\$4

5) \$79.48

\$79

6) \$1.94

\$2

D) Round each amount to the nearest ten dollars.

1) \$38.14

\$40

2) \$220.24

\$220

3) \$548.75

\$550

4) \$81.89

\$80

5) \$63.64

\$60

6) \$473.61

\$470