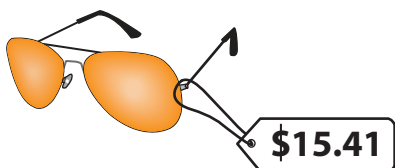


# Rounding Money


A) Round the price of each item to the nearest dollar.

1)



\_\_\_\_\_

2)



\_\_\_\_\_


3)



\_\_\_\_\_

B) Round the price of each item to the nearest ten dollars.

1)



\_\_\_\_\_

2)



\_\_\_\_\_

3)



\_\_\_\_\_

C) Round each amount to the nearest dollar.

1) \$7.55 \_\_\_\_\_

2) \$11.32 \_\_\_\_\_

3) \$45.72 \_\_\_\_\_

4) \$4.07 \_\_\_\_\_

5) \$79.48 \_\_\_\_\_

6) \$1.94 \_\_\_\_\_

D) Round each amount to the nearest ten dollars.

1) \$38.14 \_\_\_\_\_

2) \$220.24 \_\_\_\_\_

3) \$548.75 \_\_\_\_\_

4) \$81.89 \_\_\_\_\_

5) \$63.64 \_\_\_\_\_

6) \$473.61 \_\_\_\_\_