

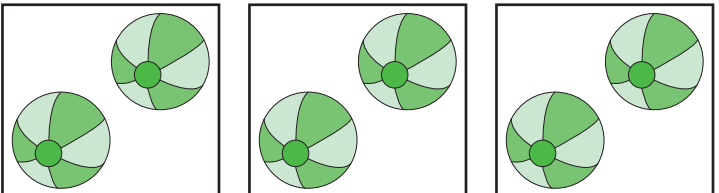


Skip Counting by 2s

A) Skip count by 2s, and find the total number of items.

1)  _____

2)  _____

3)  _____

B) Skip count by 2s, and write the missing numbers.

1)

4	6	8		
---	---	---	--	--

2)

10	12			18
----	----	--	--	----

3)

8	10		14	
---	----	--	----	--

4)

12	14	16		
----	----	----	--	--