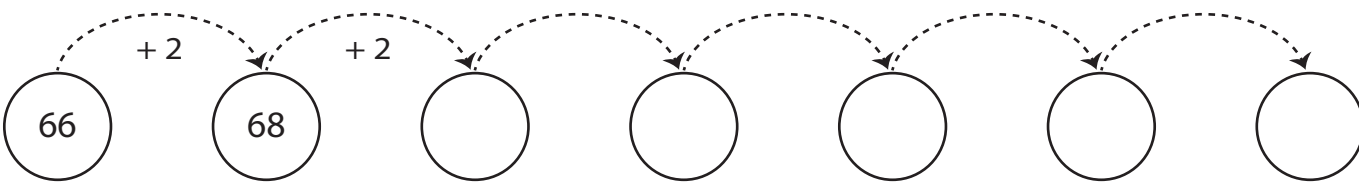
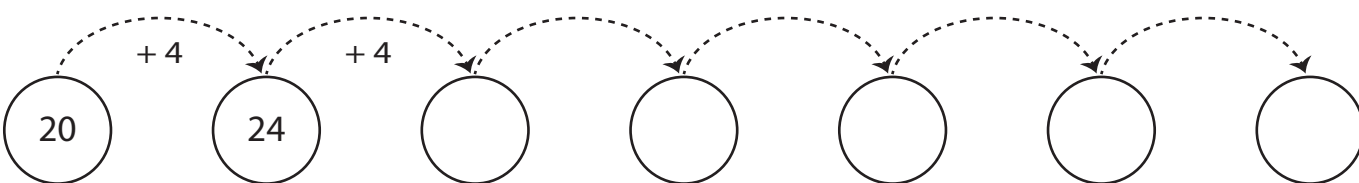
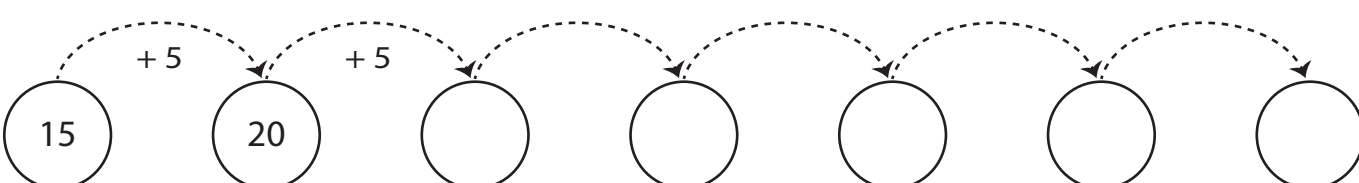


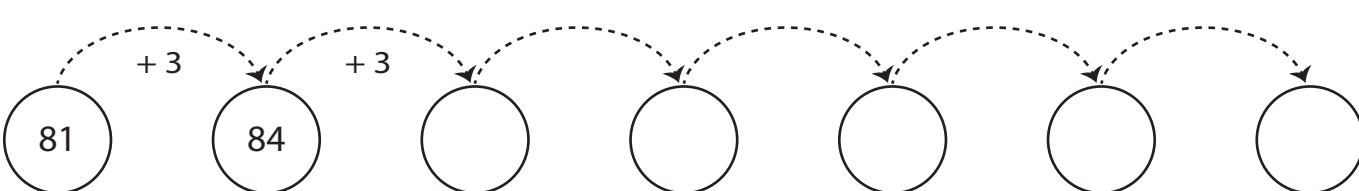
Skip Counting in 2s to 5s

A) Complete each pattern.

1) 

2) 

3) 

4) 

B) Choose the correct option.

- 1) What is the rule for the pattern 55, 60, 65, 70?
 - a) skip by 3s
 - b) skip by 2s
 - c) skip by 4s
 - d) skip by 5s
- 2) In the counting pattern by 2s, what number comes after 84?
 - a) 86
 - b) 88
 - c) 80
 - d) 82
- 3) Choose the correct pattern for the rule: Skip count by 3s.
 - a) 45, 50, 55, 60
 - b) 45, 48, 51, 54
 - c) 42, 44, 46, 48
 - d) 42, 46, 50, 54
- 4) If you start at 56 and skip count by 4s until you reach 72, how many skips did you take?
 - a) 3 skips
 - b) 5 skips
 - c) 4 skips
 - d) 6 skips