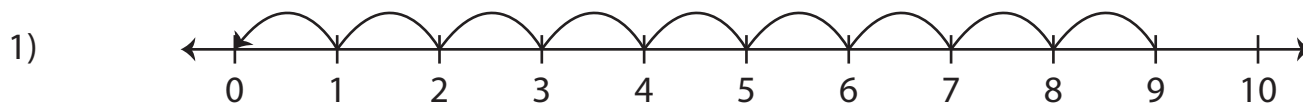


Number Line Subtraction | 0 - 10

Read each number line and find the difference.



$$9 - 9 = \underline{\hspace{2cm}}$$

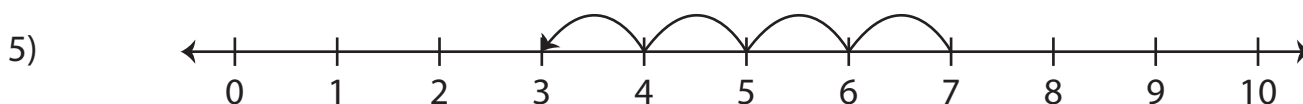


Preview

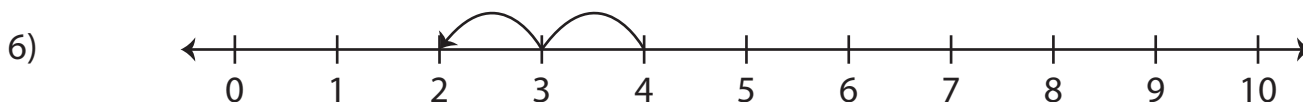
3) **Become a member to unlock**
 4) **unrestricted access to both printable**
and online worksheets.



www.tutoringhour.com



$$7 - 4 = \underline{\hspace{2cm}}$$



$$4 - 2 = \underline{\hspace{2cm}}$$