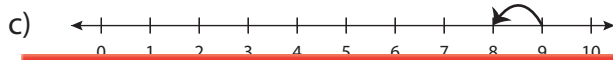
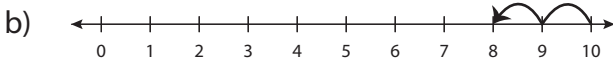
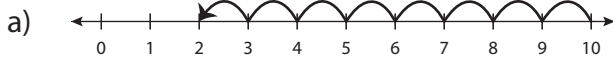


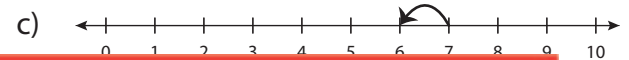
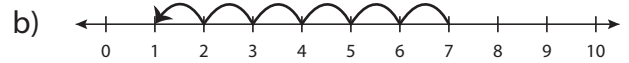
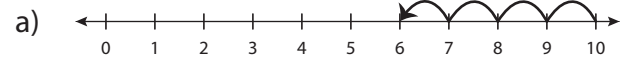
Number Line Subtraction - MCQ

Identify the correct number line for each subtraction sentence.

1) $10 - 2 = 8$



2) $7 - 6 = 1$



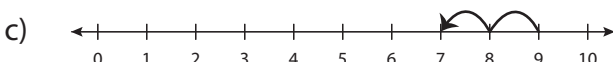
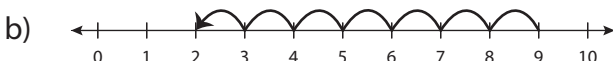
3) 5



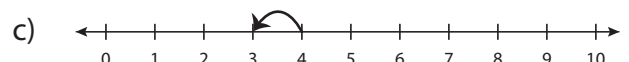
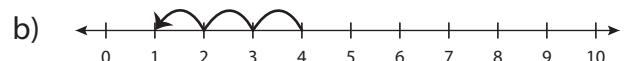
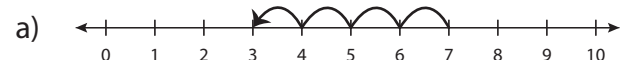
5) 8



7) $9 - 7 = 2$



8) $4 - 3 = 1$



Preview

Become a member to unlock
unrestricted access to both printable
and online worksheets.

www.tutoringhour.com

