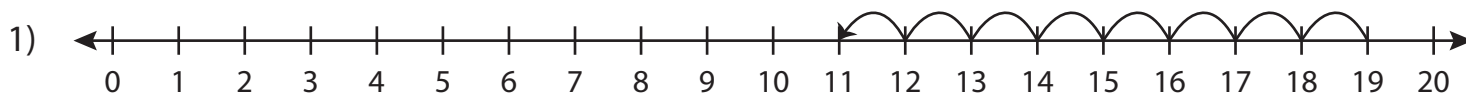


Number Line Subtraction | 0 - 20

Complete the subtraction sentence that describes each model.



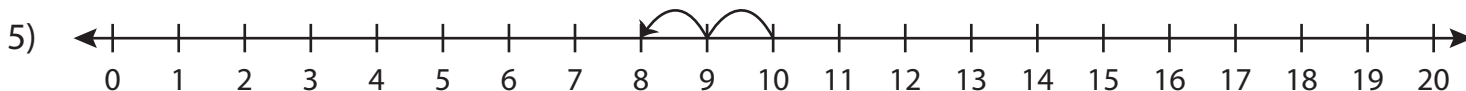
$$19 - 8 = \underline{\quad}$$



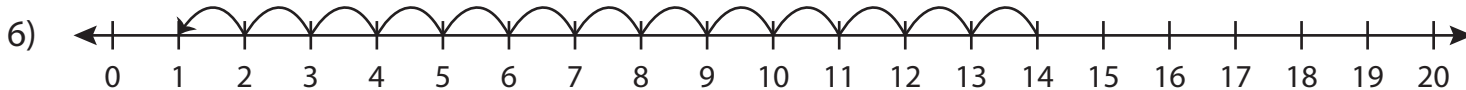
Preview

**Become a member to unlock
unrestricted access to both printable
and online worksheets.**

www.tutoringhour.com



$$10 - \underline{\quad} = 8$$



$$\underline{\quad} - 13 = 1$$