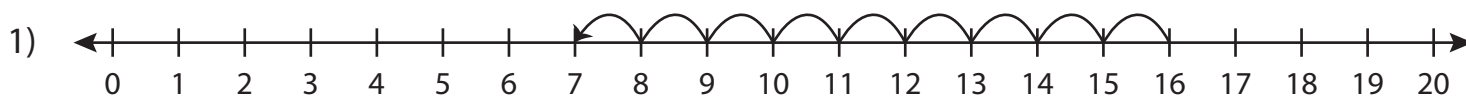


Number Line Subtraction | 0 - 20

Complete the subtraction sentence that describes each model.



$$\underline{\quad\quad} - 9 = 7$$

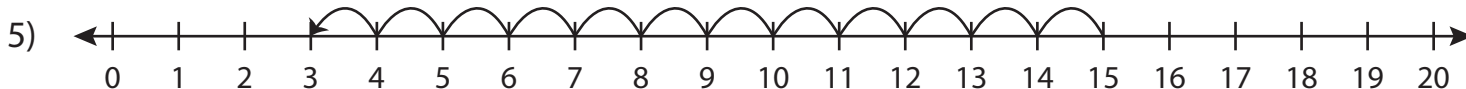


Preview

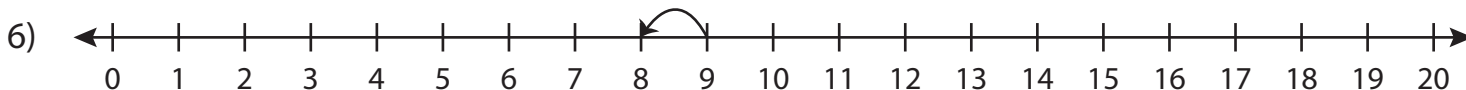
**Become a member to unlock
unrestricted access to both printable
and online worksheets.**



www.tutoringhour.com



$$15 - 12 = \underline{\quad\quad}$$



$$9 - \underline{\quad\quad} = 8$$