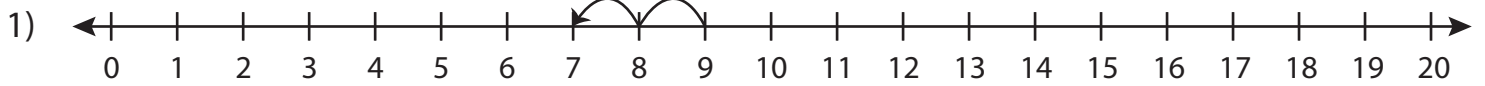
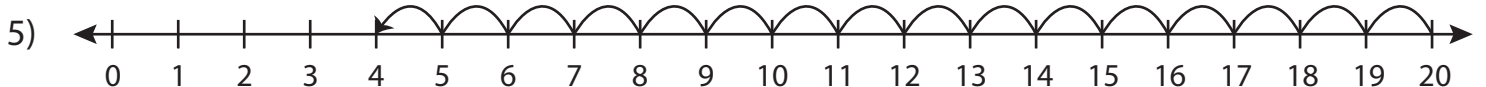


Number Line Subtraction | 0 - 20

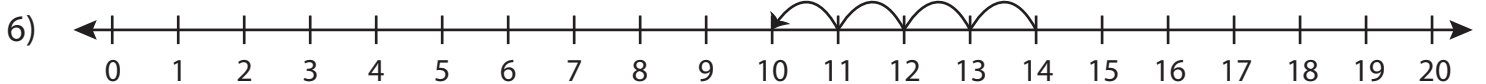
Write the subtraction sentence that describes each model.



$$\underline{\quad\quad} - \underline{\quad\quad} = \underline{\quad\quad}$$



$$\underline{\quad\quad} - \underline{\quad\quad} = \underline{\quad\quad}$$



$$\underline{\quad\quad} - \underline{\quad\quad} = \underline{\quad\quad}$$

Preview

**Become a member to unlock
unrestricted access to both printable
and online worksheets.**

www.tutoringhour.com