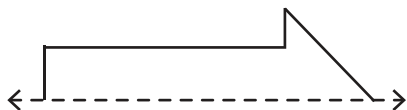


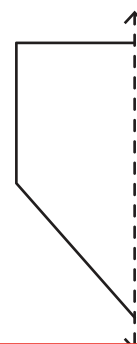
# Symmetry

Draw the other half of each symmetrical shape.

1)



2)



3)

## Preview

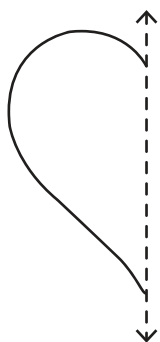
Become a member to unlock  
unrestricted access to both printable  
and online worksheets.



[www.tutoringhour.com](http://www.tutoringhour.com)

5)

7)



8)

