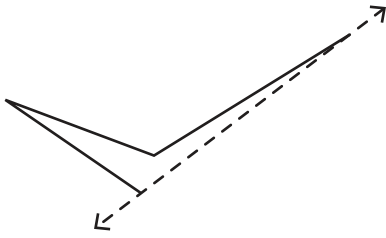


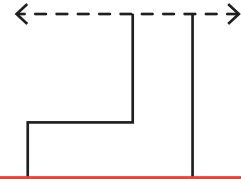
Symmetry

Draw the other half of each symmetrical shape.

1)



2)



3)

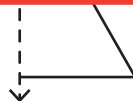
Preview

Become a member to unlock
unrestricted access to both printable
and online worksheets.

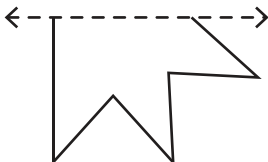


www.tutoringhour.com

5)



7)



8)

