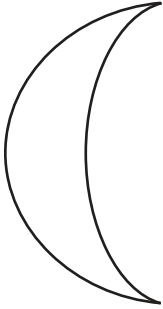


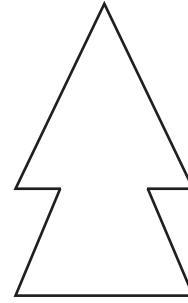
Symmetry

Draw a line of symmetry on each shape.

1)



2)



3)

Preview


Become a member to unlock
unrestricted access to both printable
and online worksheets.

5)



www.tutoringhour.com

7)



8)

