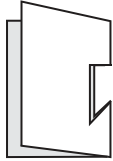


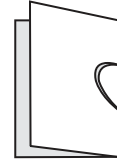
Symmetry

What will be the shape at the center when you unfold the paper?

1)



2)



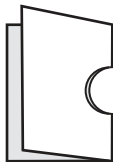
3)

**Become a member to unlock
unrestricted access to both printable
and online worksheets.**

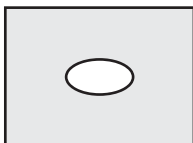


www.tutoringhour.com

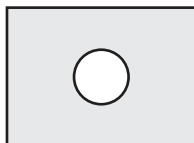
5)



a)

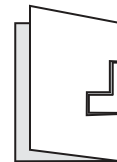


b)

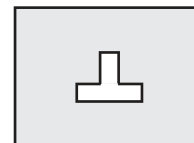


c)

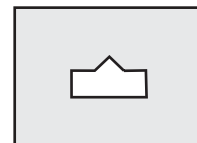
6)



a)



b)



c)