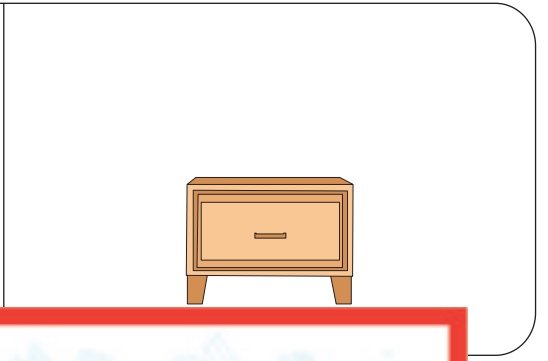
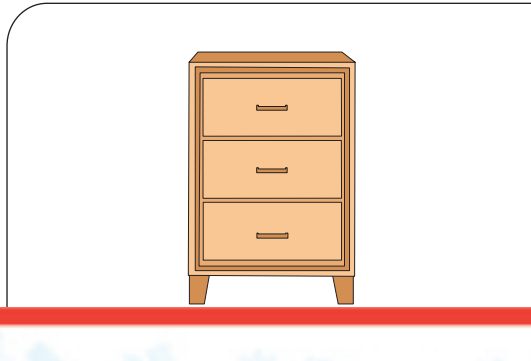
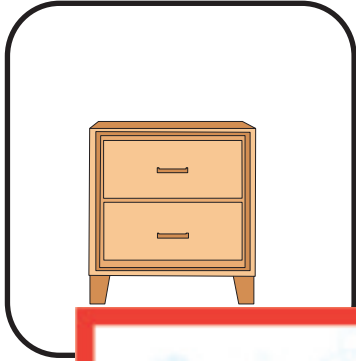


Tall vs. Short

A) Look at the first object in each set and compare it with the other two.
Circle the object that's taller than the first one.



Preview

Become a member to unlock
unrestricted access to both printable
and online worksheets.



www.tutoringhour.com

B) Lo
C

