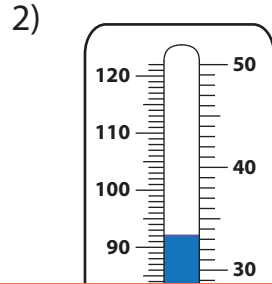
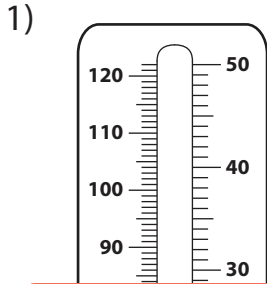
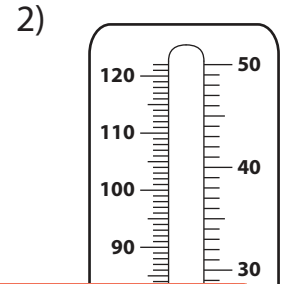
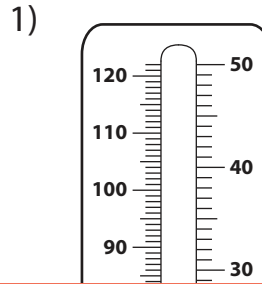


Temperatures - Mixed Bag

A) Write the temperature shown on each thermometer.



B) Shade the thermometer according to the given temperature.



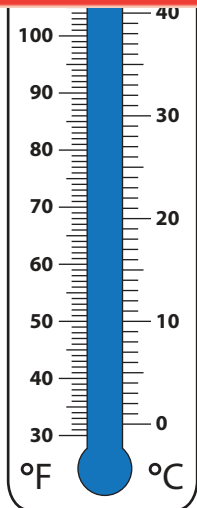
Preview

Become a member to unlock
unrestricted access to both printable
and online worksheets.



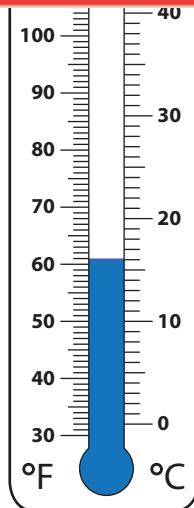
www.tutoringhour.com

C) R
1)



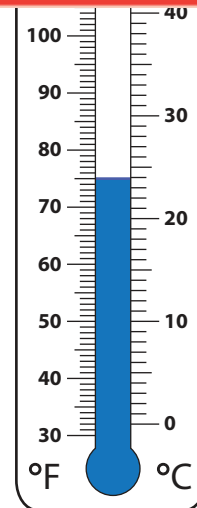
125°F

116°F



16°C

14°C



80°F

75°F