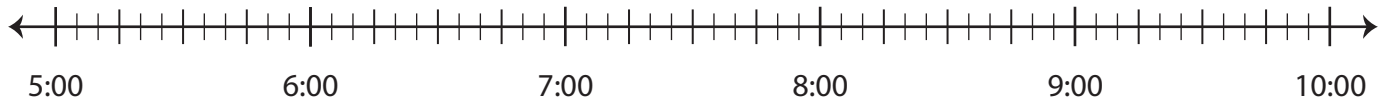


Elapsed Time

Draw hops on each number line and find the elapsed time.

- 1) Start time: 6:40 a.m. End time: 8:00 a.m.



Elapsed time: _____

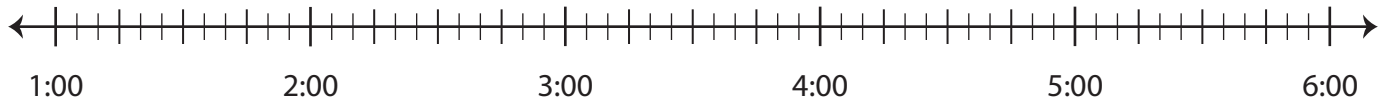
2)



3)

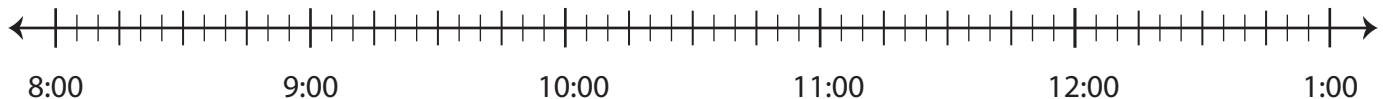


4)



Elapsed time: _____

- 5) Start time: 9:50 p.m. End time: 11:35 p.m.



Elapsed time: _____

Preview

Become a member to unlock
unrestricted access to both printable
and online worksheets.

www.tutoringhour.com

