








# Elapsed Time

Read the time on the analog clocks and determine the start time, end time, and elapsed time.

	Start time	End time	Elapsed time
1)			6 hours
2)			
3)	<div style="border: 2px solid red; padding: 10px; background-color: #e0f0ff;"> <h2 style="color: #0070c0;">Preview</h2> <p style="color: #0070c0; font-weight: bold;">Become a member to unlock unrestricted access to both printable and online worksheets.</p> <p style="color: #0070c0; font-weight: bold;">www.tutoringhour.com</p>  </div>		
4)			
5)			
6)	