














Elapsed Time

Read the time on the digital clocks and determine the elapsed time.

	Start time	End time	Elapsed time			
1)			<input type="text"/>			
2)			<input type="text"/>			
3)			<input type="text"/>			
4)	<div style="border: 2px solid red; padding: 10px; text-align: center;"> <h2 style="color: blue;">Preview</h2> <p style="color: blue; font-weight: bold;">Become a member to unlock unrestricted access to both printable and online worksheets.</p>  <p>www.tutoringhour.com</p> </div>					
5)						
6)						
7)						
8)						<input type="text"/>
9)						<input type="text"/>
10)						<input type="text"/>