
















## Elapsed Time

Read the time on the digital clocks and determine the elapsed time.

	Start time	End time	Elapsed time
1)			<input type="text"/>
2)			<input type="text"/>
3)			<input type="text"/>
4)	<div style="border: 2px solid red; padding: 10px; text-align: center;"> <h1 style="color: blue;">Preview</h1> <p style="color: blue; font-weight: bold;">Become a member to unlock unrestricted access to both printable and online worksheets.</p>  <p><a href="http://www.tutoringhour.com">www.tutoringhour.com</a></p> </div>		
5)			
6)			
7)			
7)			<input type="text"/>
8)			<input type="text"/>
9)			<input type="text"/>
10)			<input type="text"/>