

Estimating Time


Estimate the time required for each action and check the correct option.

- 1) It would take Becky _____ to drink the hot chocolate.



- less than a minute
 more than a minute

- 2) It would take Mr. Brown _____ to ring the doorbell.



- less than a minute
 more than a minute

Preview


Become a member to unlock
unrestricted access to both printable
and online worksheets.

www.tutoringhour.com

- 3) It v
ba



- 5) It v
the



- more than a minute




- more than a minute

- 7) It would take Jared _____ to open the water bottle.



- less than a minute
 more than a minute

- 8) It would take Tony _____ to clean the fish tank.



- less than a minute
 more than a minute