

Telling Time

A) Read each clock and write the time.

1)



2)



3)



4)

Preview

Become a member to unlock
unrestricted access to both printable
and online worksheets.



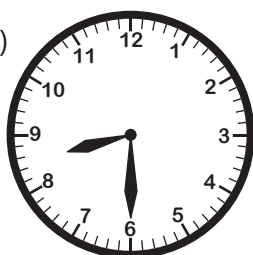
www.tutoringhour.com

B)

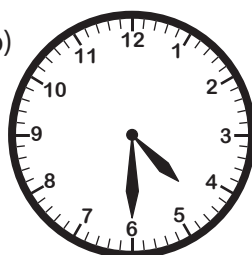


2) Choose the clock that shows 8:30.

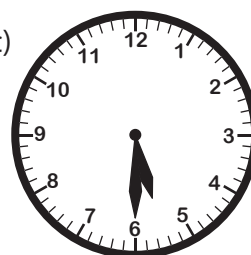
a)



b)



c)



d)

