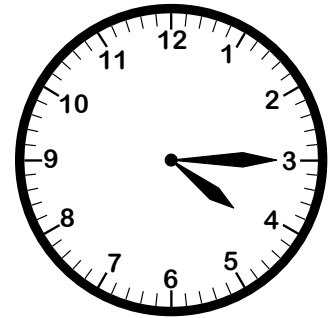
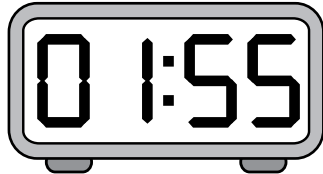


Analog and Digital Clocks

Match each digital clock to the analog clock that shows the same time.

1)



2)


Preview

Become a member to unlock
unrestricted access to both printable
and online worksheets.



www.tutoringhour.com

3)



4)

