



Telling Time

A) Read each clock and write the time.


1)



2)



3)



4)

Preview

Become a member to unlock
unrestricted access to both printable
and online worksheets.


B)

www.tutoringhour.com

Time: 12:35



C) Choose the correct time shown by the clock.



A)

4:50

B)

10:20

C)

3:50