



# Telling Time

A) Read each clock and write the time.


1)



2)



3)



4)

## Preview

Become a member to unlock  
unrestricted access to both printable  
and online worksheets.


B)

[www.tutoringhour.com](http://www.tutoringhour.com)

Time : 2:20



C) Choose the correct time shown by the clock.



A)

**11:25**

B)

**11:15**

C)

**5:55**