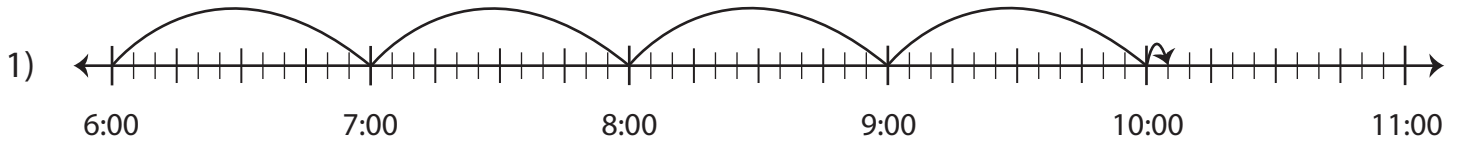


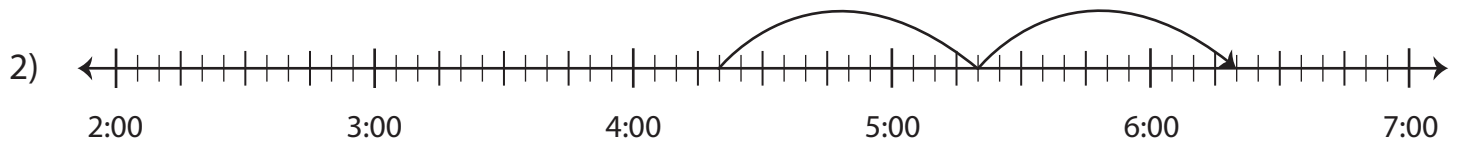
Elapsed Time

Answer Key

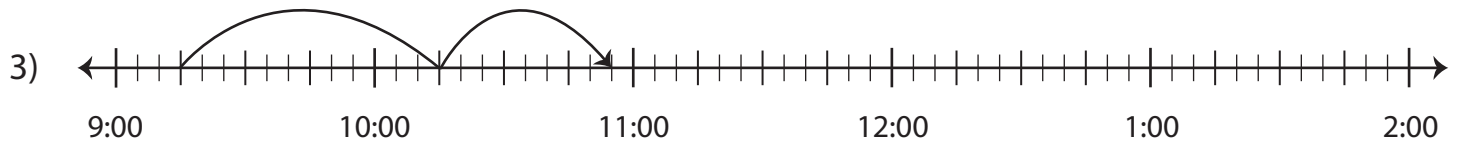
Find the elapsed time using the start time and end time.



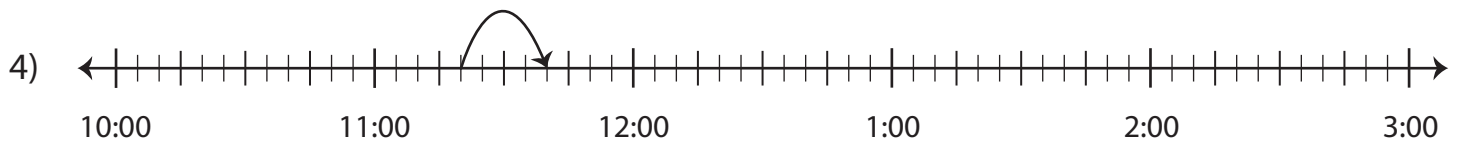
Start Time	End Time	Elapsed Time
6:00 p.m.	10:05 p.m.	4 hours and 5 minutes



Start Time	End Time	Elapsed Time
4:20 a.m.	6:20 a.m.	2 hours



Start Time	End Time	Elapsed Time
9:15 a.m.	10:55 a.m.	1 hour and 40 minutes



Start Time	End Time	Elapsed Time
11:20 p.m.	11:40 p.m.	20 minutes