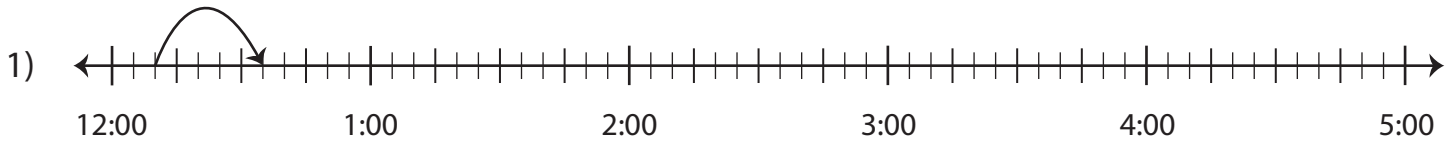
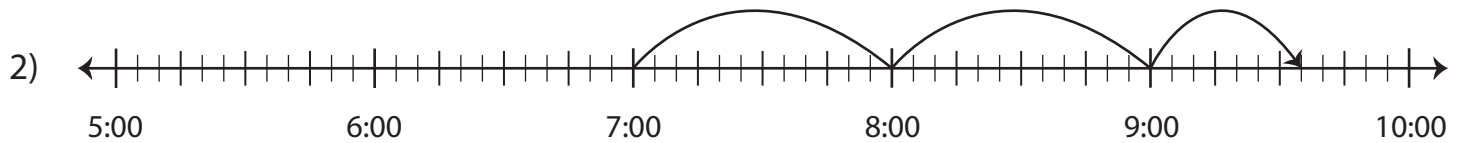


# Elapsed Time

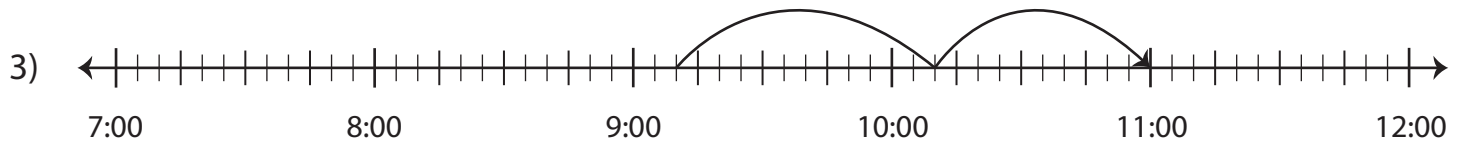
Find the elapsed time using the start time and end time.



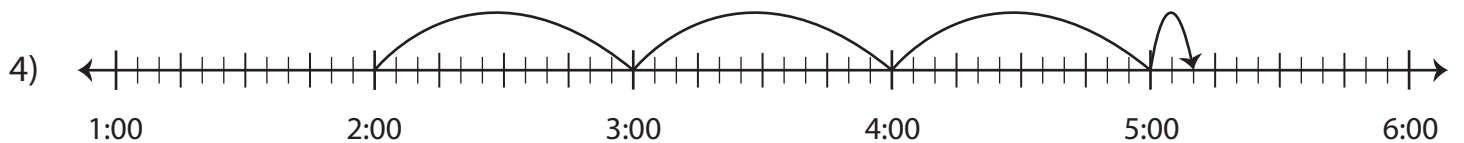
Start Time	End Time	Elapsed Time
12:10 a.m.	12:35 a.m.	



Start Time	End Time	Elapsed Time
7:00 a.m.	9:35 a.m.	



Start Time	End Time	Elapsed Time
9:10 p.m.	11:00 p.m.	



Start Time	End Time	Elapsed Time
2:00 p.m.	5:10 p.m.	