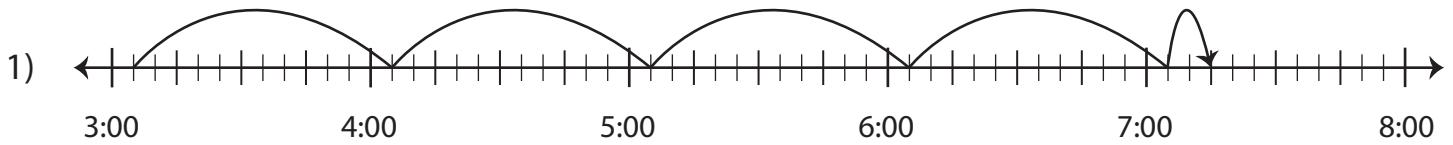


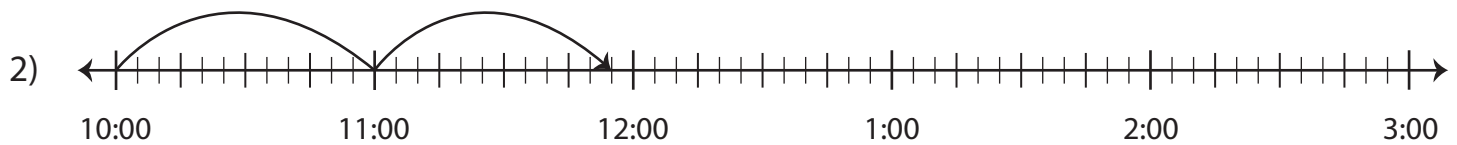
Elapsed Time

Answer Key

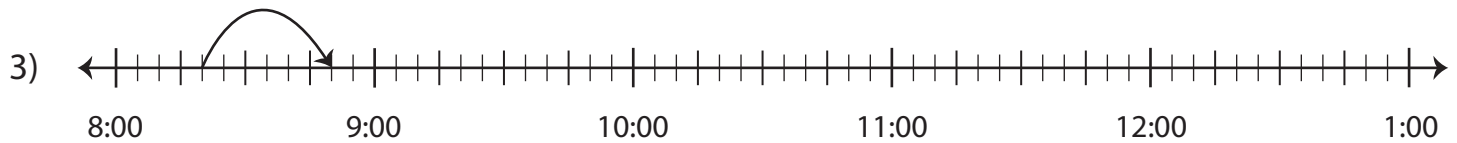
Find the elapsed time using the start time and end time.



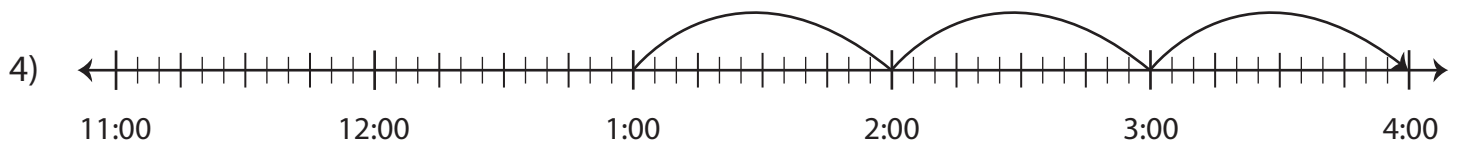
Start Time	End Time	Elapsed Time
3:05 a.m.	7:15 a.m.	4 hours and 10 minutes



Start Time	End Time	Elapsed Time
10:00 p.m.	11:55 p.m.	1 hour and 55 minutes



Start Time	End Time	Elapsed Time
8:20 a.m.	8:50 a.m.	30 minutes



Start Time	End Time	Elapsed Time
1:00 p.m.	4:00 p.m.	3 hours