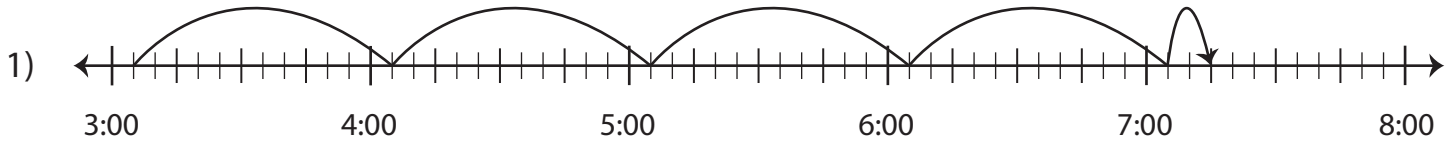
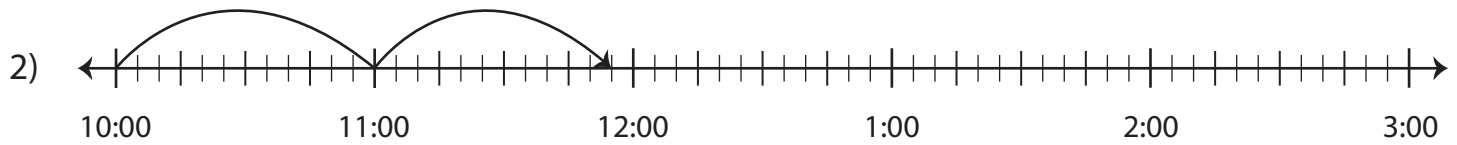


Elapsed Time

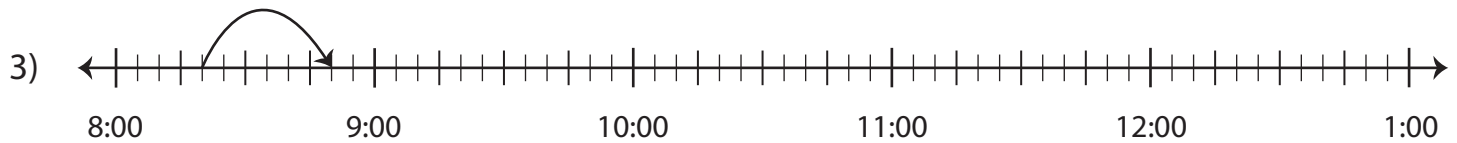
Find the elapsed time using the start time and end time.



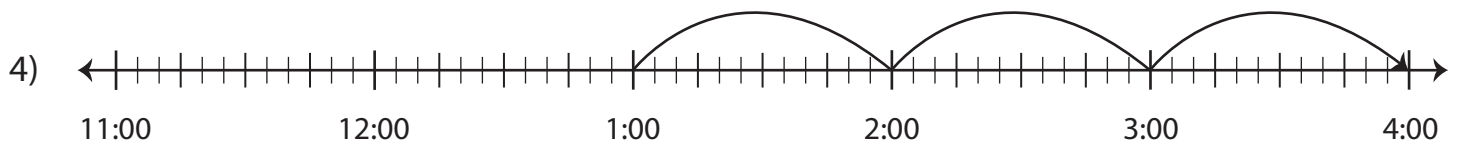
Start Time	End Time	Elapsed Time
3:05 a.m.	7:15 a.m.	



Start Time	End Time	Elapsed Time
10:00 p.m.	11:55 p.m.	



Start Time	End Time	Elapsed Time
8:20 a.m.	8:50 a.m.	



Start Time	End Time	Elapsed Time
1:00 p.m.	4:00 p.m.	