

# Transformation

Answer Key

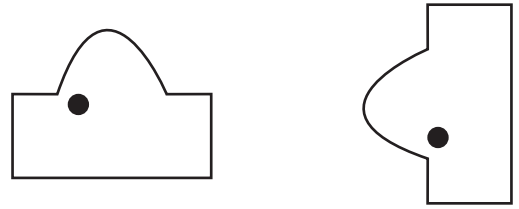
A) Identify and write the type of transformation.

1)



Translation

2)



Rotation

3)



Reflection

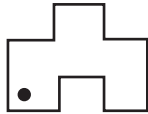
4)



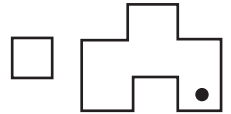
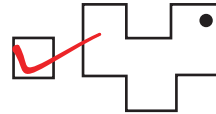
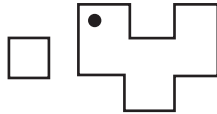
Translation

B) Choose the correct image which shows the transformation of each figure.

1) Rotation of



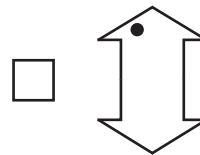
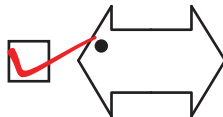
?



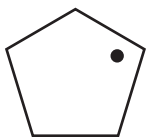
2) Reflection of



?



3) Translation of



?

