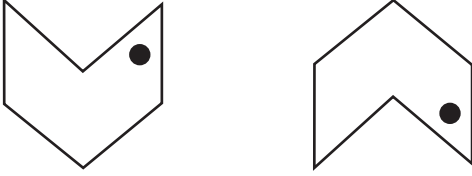


# Transformation

Answer Key

A) Identify and write the type of transformation.

1)



Reflection

2)



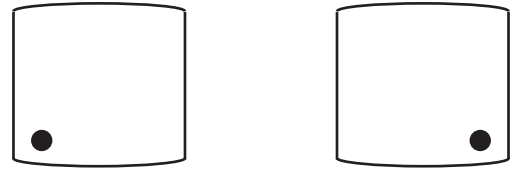
Translation

3)



Rotation

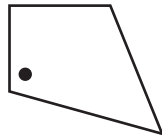
4)



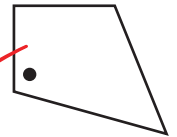
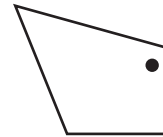
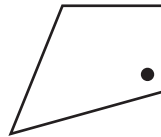
Reflection

B) Choose the correct image which shows the transformation of each figure.

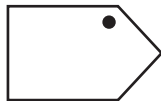
1) Translation of



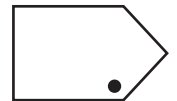
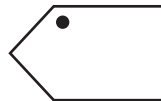
?



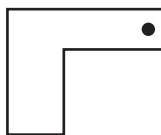
2) Rotation of



?



3) Reflection of



?

