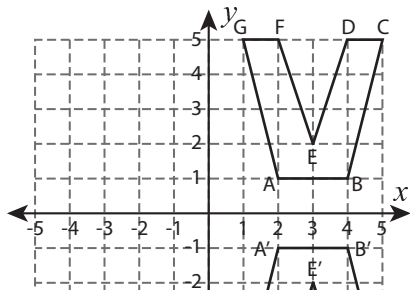


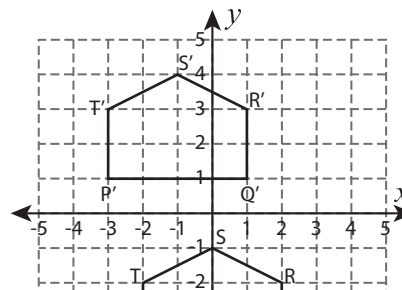
# Transformation

Identify the transformation of each shape as a translation, reflection, or rotation.

1)



2)



3)

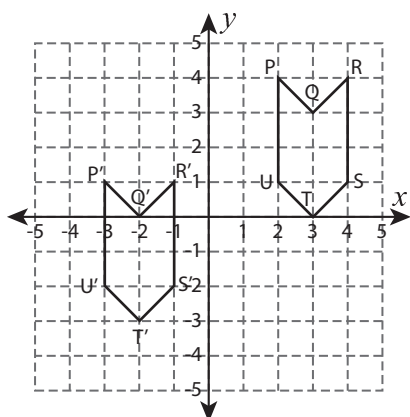
# Preview

Become a member to unlock  
unrestricted access to both printable  
and online worksheets.



[www.tutoringhour.com](http://www.tutoringhour.com)

5)



6)

