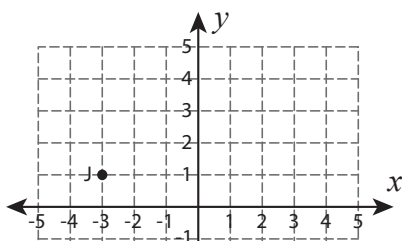


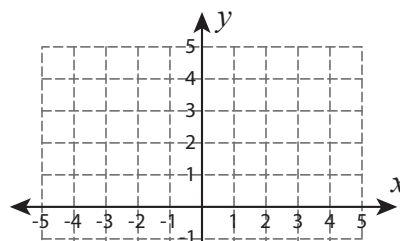
# Rotation of a Point

Graph the new position of each point after rotating it about the origin.

1)  $180^\circ$  rotation



2)  $90^\circ$  clockwise rotation



# Preview

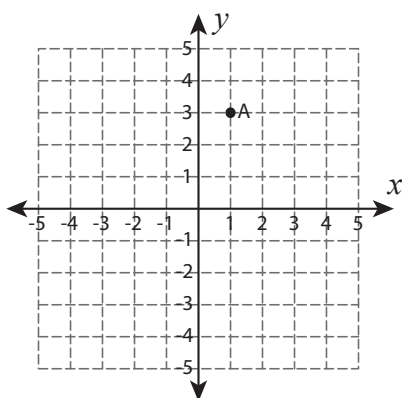
3)  $90^\circ$

Become a member to unlock  
unrestricted access to both printable  
and online worksheets.



[www.tutoringhour.com](http://www.tutoringhour.com)

5)  $90^\circ$  clockwise rotation



6)  $90^\circ$  counterclockwise rotation

