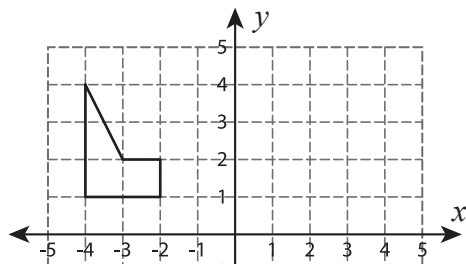


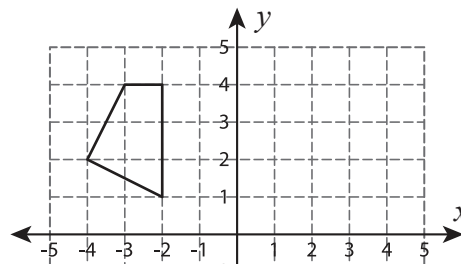
Rotation of Shapes

Graph the image of each shape after rotating it about its origin.

1) 180° rotation



2) 90° counterclockwise rotation



Preview

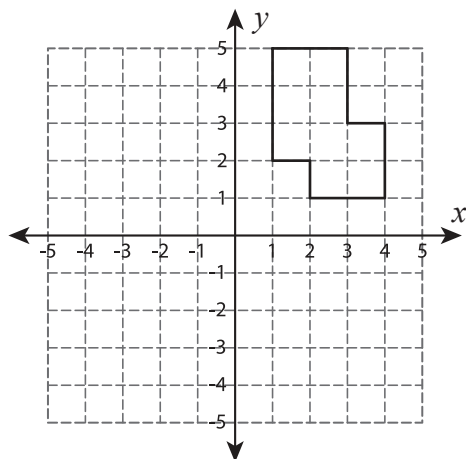
3) 9

Become a member to unlock
unrestricted access to both printable
and online worksheets.



www.tutoringhour.com

5) 90° counterclockwise rotation



6) 90° clockwise rotation

