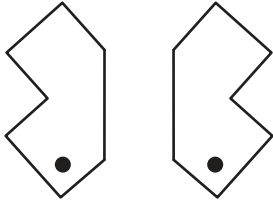


# Slide, Flip, or Turn

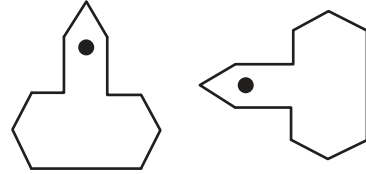
**Answer Key**

Recognize how each shape has moved. Label the transformation as a slide, flip, or turn.

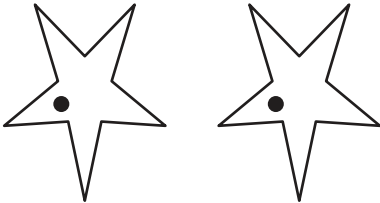
1)

**Flip**

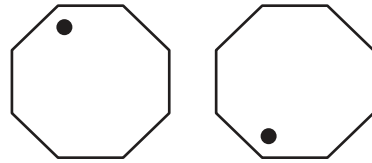
2)

**Turn**

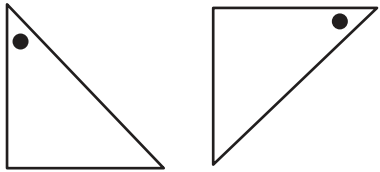
3)

**Slide**


4)

**Flip**

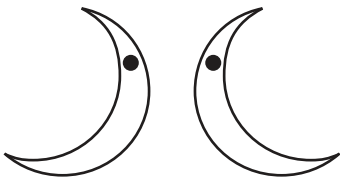
5)

**Turn**


6)

**Slide**

7)

**Flip**

8)

**Turn**