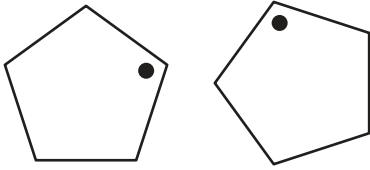


Slide, Flip, or Turn

Answer Key

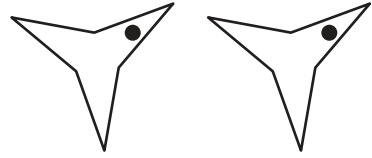
Recognize how each shape has moved. Label the transformation as a slide, flip, or turn.

1)



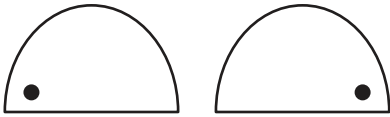
Turn

2)



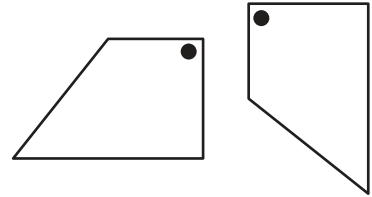
Slide

3)



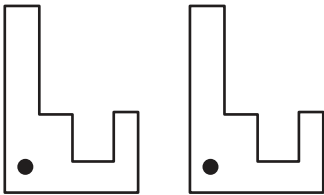
Flip

4)



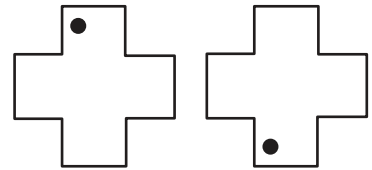
Turn

5)



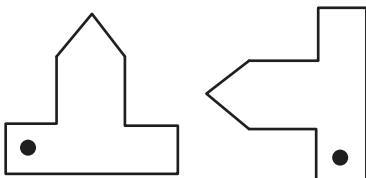
Slide

6)



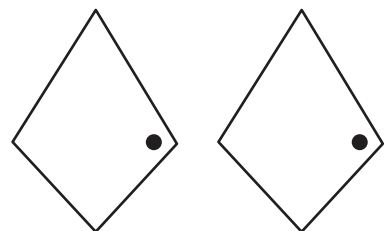
Flip

7)



Turn

8)



Slide