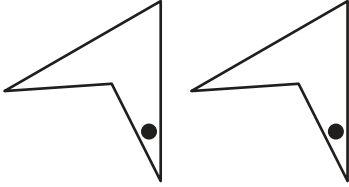


Slide, Flip, or Turn

Answer Key

Recognize how each shape has moved. Label the transformation as a slide, flip, or turn.

1)



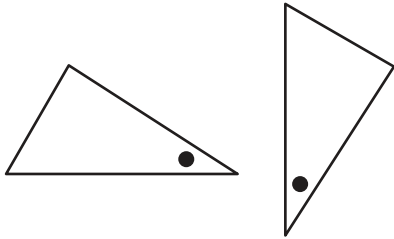
Slide

2)



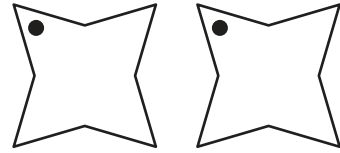
Flip

3)



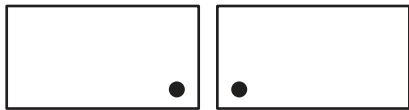
Turn

4)



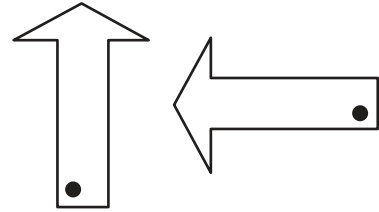
Slide

5)



Flip

6)



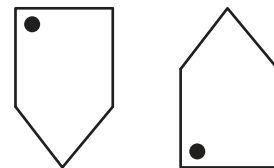
Turn

7)



Slide

8)



Flip