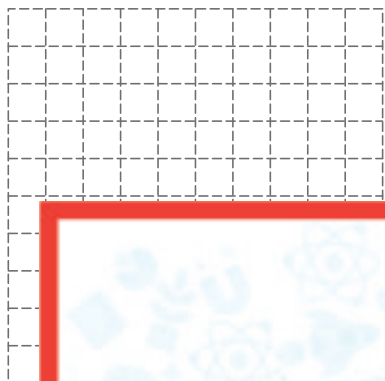


Translation of a Point

Graph the new position of each point using the translation given.

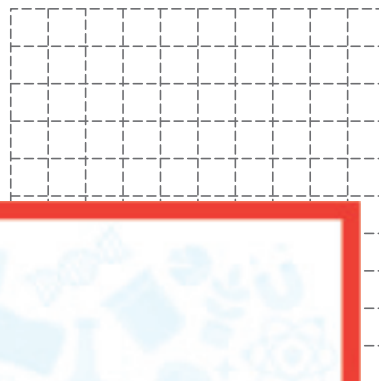
1) 4 units up and 2 units left



2) 5 units right and 2 units down



3) 2 units up and 3 units right



Preview

Become a member to unlock
unrestricted access to both printable
and online worksheets.

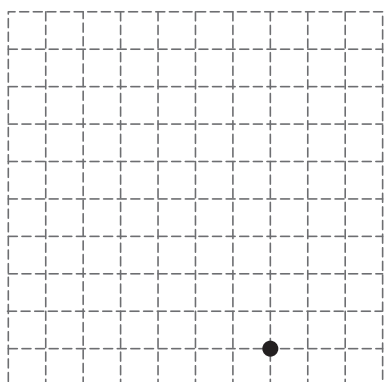


www.tutoringhour.com

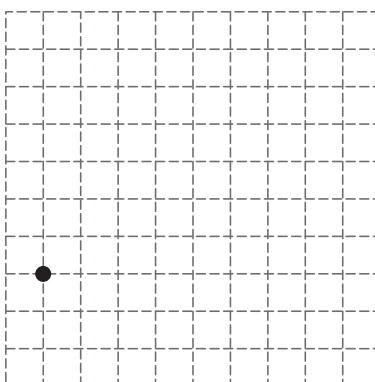
4) 8 u



7) 6 units up



8) 1 unit down and 6 units right



9) 4 units right

