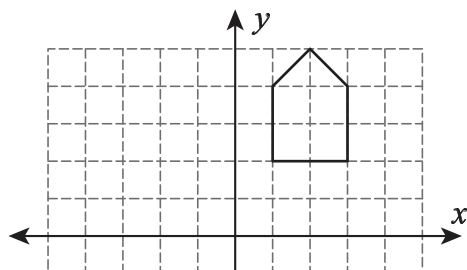


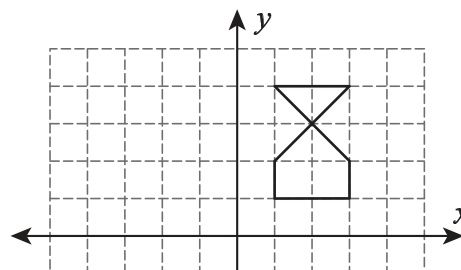
# Translation

Translate and graph the image of each shape following the given instructions.

1) 5 units left



2) 3 units left and 4 units down



## Preview

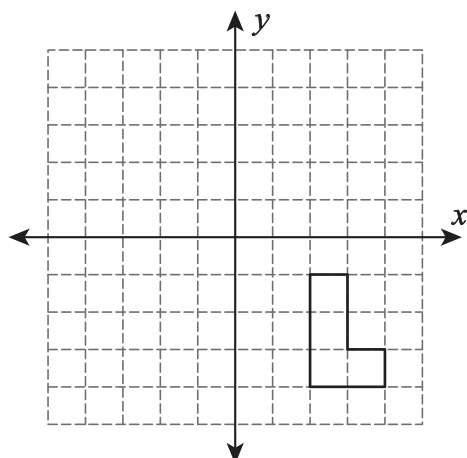
3) 2

Become a member to unlock  
unrestricted access to both printable  
and online worksheets.



[www.tutoringhour.com](http://www.tutoringhour.com)

5) 6 units left and 2 units up



6) 7 units down

