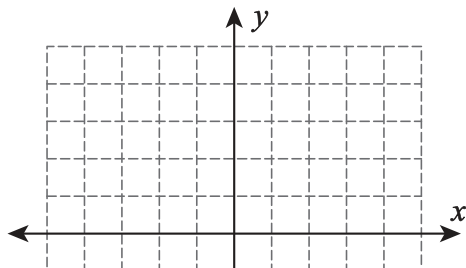


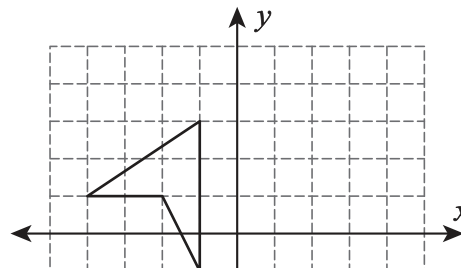
Translation

Translate and graph the image of each shape following the given instructions.

1) 6 units up



2) 1 unit up and 4 units right



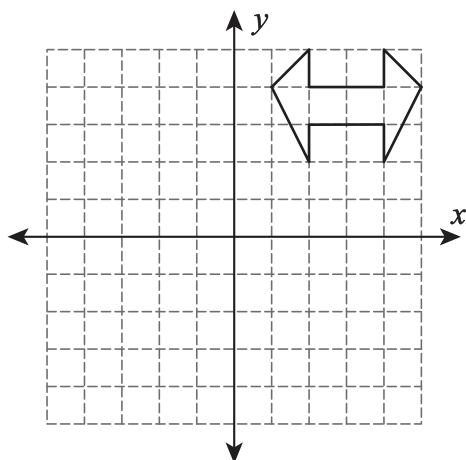
Preview

3) 5
 Become a member to unlock
 unrestricted access to both printable
 and online worksheets.



www.tutoringhour.com

5) 7 units down and 2 units left



6) 3 units right

